

## Mental Mathematics - Set C - Test 4

***I am going to start with the practice question. I will then ask you 20 questions for the test. You will see a box on your answer sheet to write your answer. For some questions there will be some information on the sheet to help you.***

***I will read each question twice, and then you will have some time to work out the answer and write it down.***

***Here is the Practice Question. You will have 5 seconds to complete this question.***

	<b>P</b>	<b>What are the two numbers shown on your answer sheet multiplied together?</b>
--	----------	---------------------------------------------------------------------------------

***Put your pens or pencils down. The answer is ...2..... Are there any questions?***

***Now we are ready to start the test. For the first group of questions you will have 5 seconds to work out each answer and write it down.***

Answer    Question    Question  
                  Number

450	1	What number is shown in the abacus?
Rectangle	2	Write down the name of the shape. Spelling is important
21	3	Sophie has twelve felt tip pens in her pencil case. She is given nine more by her friend. How many does she have now?
26	4	Listen to this number pattern, 1, 7, 13, and 19. What is the next number in the number pattern?
10 and 15	5	Look at the numbers on you answer sheet. Circle the numbers in the five times table.

***For the next group of questions you will have 10 seconds to work out each answer and write it down.***

Answer    Question    Question  
                  Number

14	6	What is twenty three minus nine?
30	7	Caroline has five bags of sweets. In each bag she has six sweets. How many sweets does Caroline have?
6	8	Raul has four dogs. He has 24 dog biscuits that he wants to share equally amongst his four dogs. How many dog biscuits does each dog get?
180	9	What do the angles in a square add up to?
£2.08	10	How much money is shown?
31	11	Look at the calendar shown. How many days are there in the next month ?

## Mental Mathematics - Set C - Test 4

9.00 (am/pm)	12	What time did the clock show 6 hours ago?
>	13	Write in the correct symbol to make the sum correct.

***For the next group of questions you will have 15 seconds to work out each answer and write it down.***

Answer	Question Number	Question
5	14	What is a quarter of twenty?
5	15	What value does the symbol need to be to make the sum correct?
1996	16	If Victoria was 13 years old in 2009, what year was she born?
18	17	What is the perimeter of the shape shown?
10	18	What is seven plus four, takeaway six, plus five?
10	19	How many millimetres are there in a centimetre?
5	20	If <b>a</b> equals ten and <b>b</b> equals two, what is the answer to <b>a</b> divided by <b>b</b> ?

***'Put your pens down. The test is over.'***

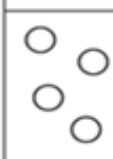





# Mental Mathematics - Set C - Test 4

First Name :	
Last Name :	
Teacher :	Class :


Total

P		21
---	--	----

Marked by \_\_\_\_\_

1	Answer	<table border="1" style="width: 100%; border-collapse: collapse; text-align: center;"> <tr> <td style="width: 33%; font-weight: bold;">100 s</td> <td style="width: 33%; font-weight: bold;">10 s</td> <td style="width: 33%; font-weight: bold;">1 s</td> </tr> <tr> <td></td> <td></td> <td></td> </tr> </table>	100 s	10 s	1 s			
100 s	10 s	1 s						
								
	Mark	<div style="border: 1px solid black; width: 20px; height: 20px;"></div>						

11	Answer	<table border="1" style="width: 100%; border-collapse: collapse; text-align: center;"> <tr> <th colspan="7">SEPTEMBER</th> </tr> <tr> <th>SU</th> <th>MO</th> <th>TU</th> <th>WE</th> <th>TH</th> <th>FR</th> <th>SA</th> </tr> <tr> <td></td> <td>1</td> <td>2</td> <td>3</td> <td>4</td> <td>5</td> <td>6</td> </tr> <tr> <td>7</td> <td>8</td> <td>9</td> <td>10</td> <td>11</td> <td>12</td> <td>13</td> </tr> <tr> <td>14</td> <td>15</td> <td>16</td> <td>17</td> <td>18</td> <td>19</td> <td>20</td> </tr> <tr> <td>21</td> <td>22</td> <td>23</td> <td>24</td> <td>25</td> <td>26</td> <td>27</td> </tr> <tr> <td>28</td> <td>29</td> <td>30</td> <td></td> <td></td> <td></td> <td></td> </tr> </table>	SEPTEMBER							SU	MO	TU	WE	TH	FR	SA		1	2	3	4	5	6	7	8	9	10	11	12	13	14	15	16	17	18	19	20	21	22	23	24	25	26	27	28	29	30				
SEPTEMBER																																																			
SU	MO	TU	WE	TH	FR	SA																																													
	1	2	3	4	5	6																																													
7	8	9	10	11	12	13																																													
14	15	16	17	18	19	20																																													
21	22	23	24	25	26	27																																													
28	29	30																																																	
	Mark	<div style="border: 1px solid black; width: 20px; height: 20px;"></div>																																																	

2	
	Mark

12	
	Mark

3		12
---	--	----

13		$3 \times 2$	$16 \div 4$	$< = >$
----	--	--------------	-------------	---------

4	
---	--

5	10 15 18 22 24
---	----------------


6	
---	--

7		5 bags
---	--	--------

8		24 4
---	--	------

9	
---	--

10	
	£

17	
	Mark

18		7 5 6 4
----	--	---------

19	
----	--

20		$a \div b$
----	--	------------