

Mental Mathematics - Set D - Test 2

I am going to start with the practice question. I will then ask you 20 questions for the test. You will see a box on your answer sheet to write your answer. For some questions there will be some information on the sheet to help you.

I will read each question twice, and then you will have some time to work out the answer and write it down.

Here is the Practice Question. You will have 5 seconds to complete this question.

	P	What are the two numbers shown multiplied together?
--	----------	--

Put your pens or pencils down. The answer is20..... Are there any questions?

Now we are ready to start the test. For the first group of questions you will have 5 seconds to work out each answer and write it down.

Answer Question Question
 Number

tonne	1	Circle the unit you think we would measure the weight of a car.
64006	2	Write sixty four thousand and six in figures.
2	3	What is six plus three take away seven?
251	4	What is three hundred and eighty-six subtract two hundred and thirty-five?
300	5	Write three hundred and forty-two to the nearest hundred?

For the next group of questions you will have 10 seconds to work out each answer and write it down.

Answer Question Question
 Number

700	6	What is the value of the seven in the number shown on your answer sheet?
7/12	7	In a group of twelve friends, five play netball and rest do not. What fraction of the friends does not play netball?

Mental Mathematics - Set D - Test 2

7	8	I think of a number. When I multiply by four then subtract one, the result is twenty-seven. What is the number?
8	9	What is the range of the numbers shown?
(5 , 4)	10	What is the coordinate shown on the grid?
obtuse	11	What is the name of the angle that is between 90 and 180 degrees?
Hexagon	12	What is the name of a six sided shape?
South West (allow SW)	13	Lucy travels North-East to go to school. Which way does she travel to return home?

For the next group of questions you will have 15 seconds to work out each answer and write it down.

Answer	Question Number	Question
6	14	How many faces does a cuboid have?
1.30pm	15	William started his Lunch break one hour ago. What time did he start his lunch break? Include AM or PM
1,2,4,8	16	Write all the factors of EIGHT?
Top Right	17	Circle the net that folds up into a cube?
Likely	18	Circle the word that describes this event. I throw two dice once and get a total more than 5?
7	19	What number is represented by the letter A on the ruler?
12	20	What is the area of the shape shown?

'Put your pens down. The test is over.'

Mental Mathematics - Set D - Test 2

First Name :	
Last Name :	
Teacher :	Class :


Total

P		5 4
----------	--	-----

Marked by _____

1	Answer g kg tonne	
----------	------------------------------	--

Mark	
<input type="checkbox"/>	

15	Answer	
		

Mark	
<input type="checkbox"/>	

2	
----------	--

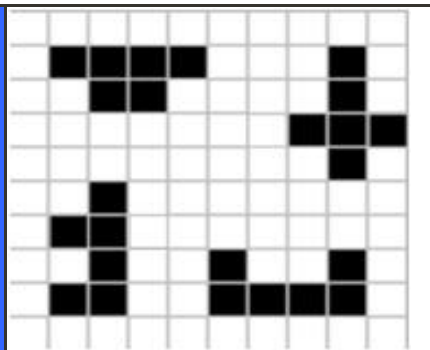
3	
----------	--

4		386 135
----------	--	---------

5	
----------	--

16	
-----------	--

6		3702
----------	--	------

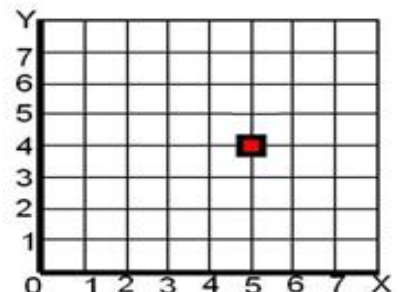
17	Answer	
		

Mark	
<input type="checkbox"/>	

7	
----------	--

8		27
----------	--	----

9		0 3 5 8
----------	--	---------

10		
	(,)	

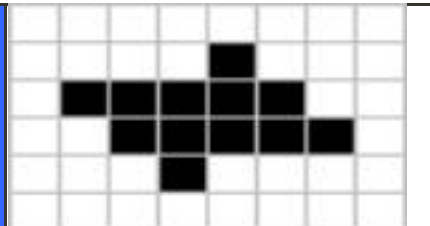
Mark	
<input type="checkbox"/>	

18	Certain Likely Unlikely Impossible	

19		

11	
-----------	--

12	
-----------	--

20		

Mark	
<input type="checkbox"/>	

13		NE
-----------	--	----

14	
-----------	--